



MINISTRY OF EDUCATION
PRIMARY ENGAGEMENT PROGRAMME
GRADE ONE WORKSHEET
SUBJECT: MATHEMATICS
LESSON: REVIEW WEEK 6
TOPIC: PLANE SHAPES

Name: _____

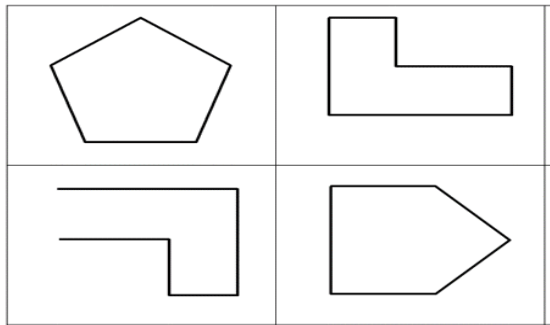
Remember: An open shape is a shape whose lines do not meet.

A closed shape is a shape whose lines meet or connect.

A plane shape is a flat shape.

Plane shapes have names.

1. Draw each shape in the correct column.



Open Shapes	Closed Shapes

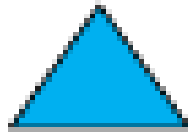
2. Colour the plane shapes using the colour code.




Rectangle



Square



Triangle



Circle

